



## Worksheet 3A: Numbers


1. These Jerseys should be in order. Can you draw them in order?




2. Add the numbers on these GAA jerseys.





---




---




---




---




---




---

3.

a) How many players are on a hurling team? \_\_\_\_\_

b) How many players are on two hurling teams? \_\_\_\_\_

# 3 MATHS

PUPIL WORKSHEETS 3A - 3F

PUPIL WORKSHEETS

## Worksheet 3B: Numbers

1. Count the number of sliotars



2. How many hurlers are there?



3. How many camogie players are there?



4. How many logos are there?



5. Write these GAA scores in words.

4 \_\_\_\_\_

10 \_\_\_\_\_

7 \_\_\_\_\_

3 \_\_\_\_\_ Points = 1 \_\_\_\_\_ goal.

6. Fill in the numbers. \_\_\_\_\_

a. Which number comes after 3? \_\_\_\_\_

b. Which number comes after 8? \_\_\_\_\_

c. Which number comes after 0? \_\_\_\_\_

WORKSHEET

3B



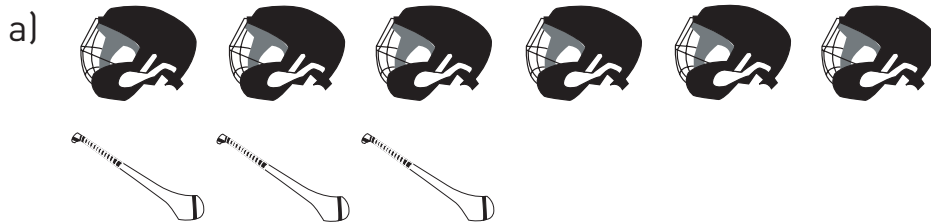
## Worksheet 3C: Numbers

1. What is the difference between these scores?

**REMEMBER ONE GOAL IS THE SAME AS 3 POINTS**

- Wexford 12 points v Dublin 9 points \_\_\_\_\_
- Clare 15 points v Limerick 10 points \_\_\_\_\_
- Down 13 points v Derry 6 points \_\_\_\_\_
- Kerry 14 points v Cork 10 points \_\_\_\_\_
- Sligo 1-10 v Galway 9 points \_\_\_\_\_
- Louth 1-12 v Meath 10 points \_\_\_\_\_
- Cavan 1-10 v Antrim 8 points \_\_\_\_\_

2. Answer the following.



There are \_\_\_\_\_ helmets.

There are \_\_\_\_\_ hurleys.

There are more \_\_\_\_\_ than \_\_\_\_\_.



There are \_\_\_\_\_ logos.

There are \_\_\_\_\_ cups.

There are more \_\_\_\_\_ than \_\_\_\_\_.

# 3 MATHS

PUPIL WORKSHEETS 3A - 3F

PUPIL WORKSHEETS

## Worksheet 3D: Numbers

Seán has written down what he did on Saturday.

8:00am	Got out of bed and got dressed.	
8:15am	Got gear ready for Go Games Blitz.	
8:30am	Had breakfast.	
9:00am	Read the newspaper.	
9:30am	Got a lift to Go Games Blitz.	
10:00am	Met with my team and got changed.	
10:30am	Blitz started.	
11:00am	Drinks break.	
12 noon	Blitz ended.	
12:30pm	Got home.	
12:45pm	Had lunch.	
1:00pm	Went to hurling match with dad.	
4:00pm	Got home.	
5:00pm	Dinnertime.	
6:00pm	Watched Dublin v Kerry Gaelic Football game on TV.	
8:00pm	Went to bed.	

Write what you did on Saturday beside Seán's times.

Answer these questions:

1. How long was Seán awake for last Saturday? \_\_\_\_\_
2. What times did he eat? \_\_\_\_\_
3. What time did the blitz start? \_\_\_\_\_
4. What time did it finish? \_\_\_\_\_
5. How do we write eight o'clock in the morning? \_\_\_\_\_

WORKSHEET

3D



## Worksheet 3E: Lengths

Colour in the tallest hurler.



Colour in the smallest footballer.



Colour in the tallest camogie player.



Colour in the smallest handballer.



Estimate the length of these lines and then measure them with your ruler.

ESTIMATE

LENGTH









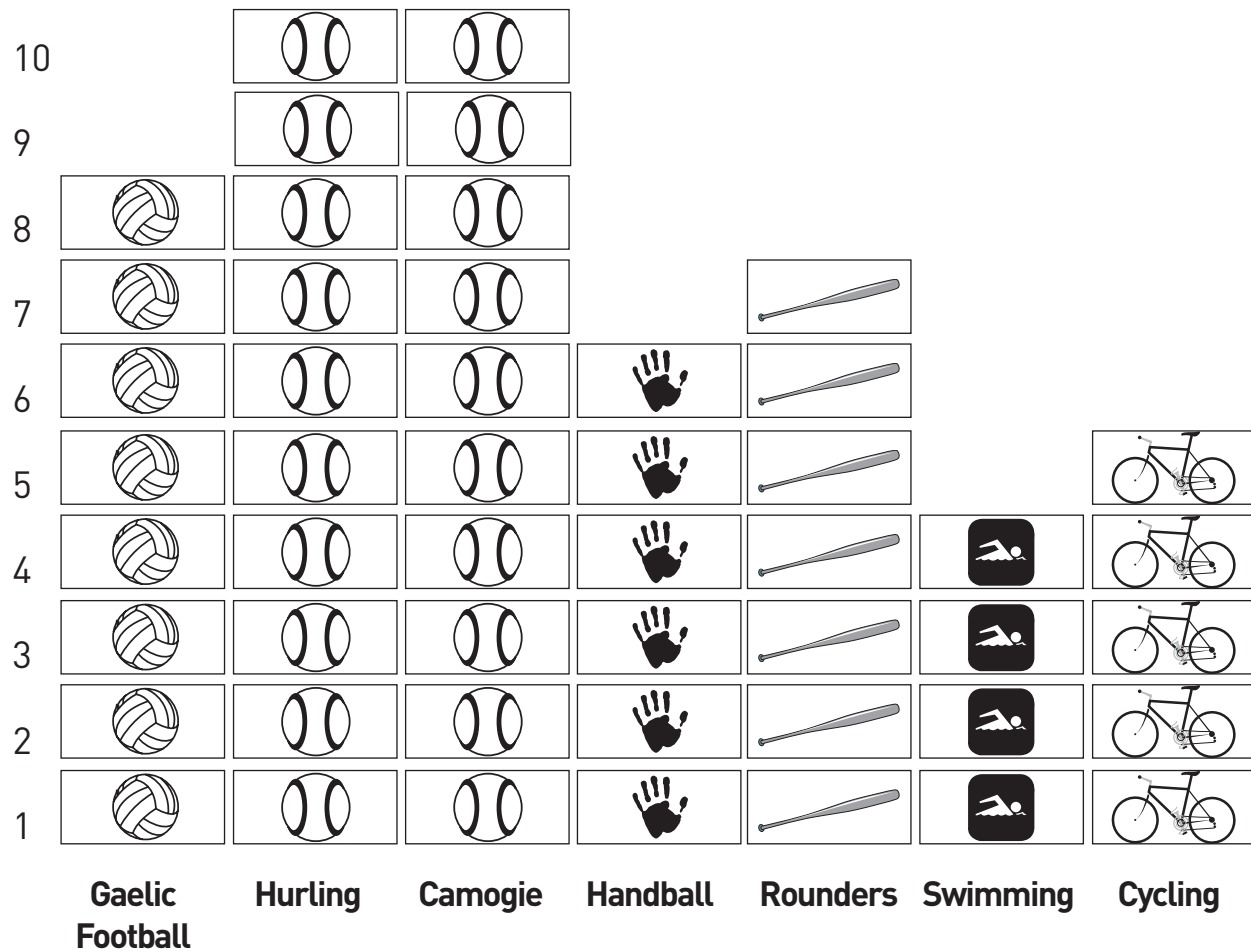
# 3 MATHS

PUPIL WORKSHEETS 3A - 3F

PUPIL WORKSHEETS

## Worksheet 3F: Numbers

This Pictogram shows the favourite activities of a group of children.



- Which activities were most popular? \_\_\_\_\_
- How many more children chose hurling than swimming? \_\_\_\_\_
- How many fewer children chose swimming than handball? \_\_\_\_\_
- How many more children chose rounders than cycling? \_\_\_\_\_
- Which activity was least popular? \_\_\_\_\_
- What is your favourite activity? \_\_\_\_\_